

First and last name

Question 1/15

Fill in the blanks.

The amount of turning is called an ----- .

- A. line
- B. angle

Question 2/15

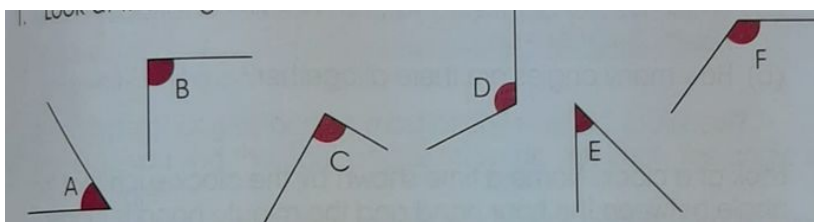
Fill in the blanks.

An angle is the amount of turning between ----- at a point.

- A. 3 lines
- B. 2 lines
- C. 1 line

Question 3/15

Look at the angles below.



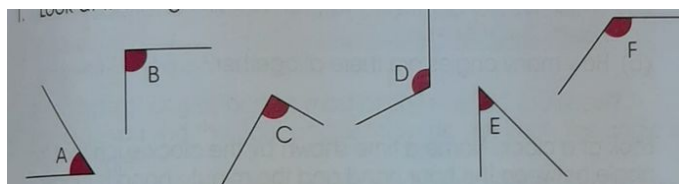
Which angles are bigger than the right angle?

Ans: -----

- A. D & A
- B. D & E
- C. D & F

Question 4/15

Look at the angles below.




Which angles are right angles?

Ans:-----

- A. B & C
- B. C & E
- C. B & F

Question 5/15

Mark the right angles.

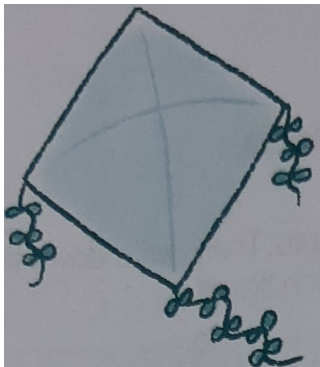


There are ----- right angles.

- A. 3
- B. 4
- C. 2

Question 6/15

Mark the angle of this object. Then, write down the number of angles.

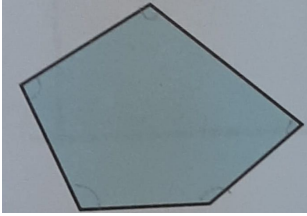


----- angles

- A. 4
- B. 3
- C. 5

Question 7/15

Mark all angles inside the figure. Then, write down the sides and angles.



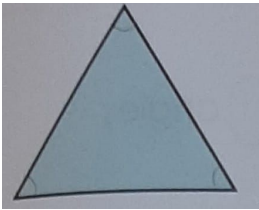
----- sides

----- angles

- A. 5 & 6
- B. 5 & 5
- C. 5 & 4

Question 8/15

Mark all angles inside the figure. Then, write down the sides and angles.




----- sides

----- angles

- A. 3 & 3
- B. 3 & 5
- C. 3 & 4

Question 9/15

Mark all the right angles.




There are ----- right angles.

- A. 4
- B. 6
- C. 3

Question 10/15

Fill in the blanks with " smaller than" , "bigger than" or equal to;



This angle is ----- a right angle.

- A. smaller than
- B. bigger than
- C. equal to

Question 11/15

Fill in the blanks with " smaller than" , "bigger than" or equal to;




This angle is ----- a right angle.

- A. smaller than
- B. equal to
- C. bigger than

Question 12/15

Fill in the blanks with " smaller than" , "bigger than" or equal to;

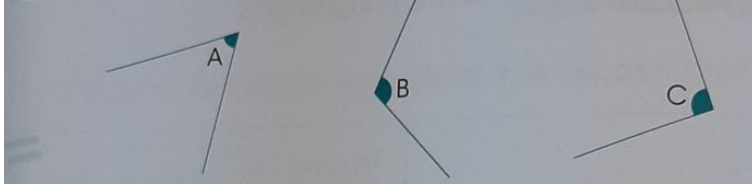


This angle is ----- a right angle.

- A. smaller than
- B. bigger than
- C. equal to

Question 13/15

Compare these angles and fill in the blanks.

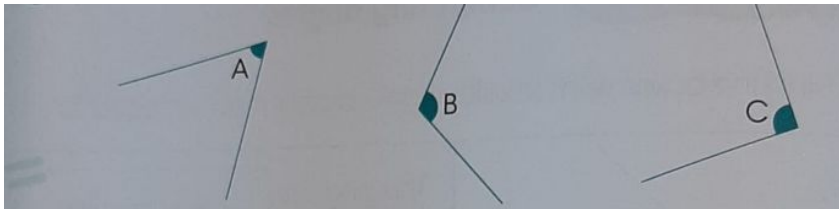


Angle ----- is a right angle.

- A. angle C
- B. angle B
- C. angle A

Question 14/15

Compare these angles and fill in the blanks.

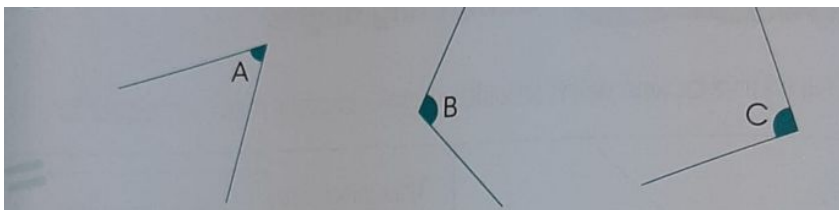


Angle B is ----- than a right angle.

- A. smaller
- B. bigger

Question 15/15

Compare these angles and fill in the blanks.



Angle ----- is the biggest angle.

- A. angle B
- B. angle C
- C. angle A