

First and last name .....

### Question 1/15

Fill in the blanks.

The amount of turning is called an ----- .

- A. line
- B. angle

### Question 2/15

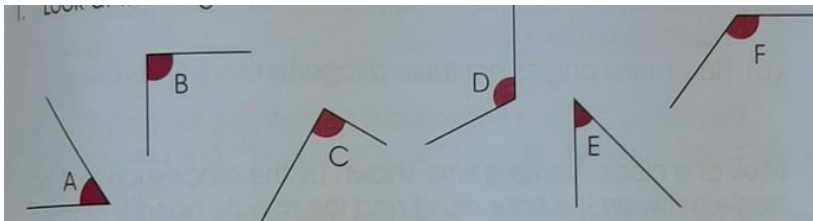
Fill in the blanks.

An angle is the amount of turning between ----- at a point.

- A. 3 lines
- B. 2 lines
- C. 1 line

### Question 3/15

Look at the angles below.



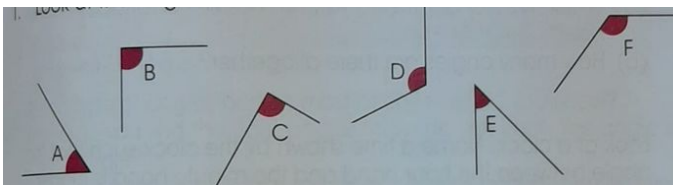
Which angles are bigger than the right angle?

Ans: -----

- A. D & A
- B. D & E
- C. D & F

### Question 4/15

Look at the angles below.




Which angles are right angles?

Ans:-----

- A. B & C
- B. C & E
- C. B & F

**Question 5/15**

Mark the right angles.

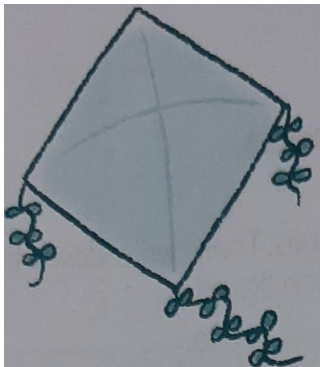


There are ----- right angles.

- A. 3
- B. 4
- C. 2

**Question 6/15**

Mark the angle of this object. Then, write down the number of angles.

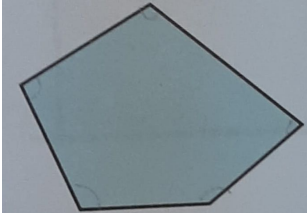


----- angles

- A. 4
- B. 3
- C. 5

**Question 7/15**

Mark all angles inside the figure. Then, write down the sides and angles.



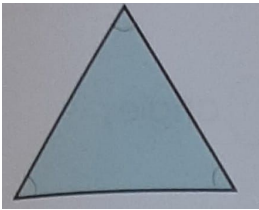
----- sides

----- angles

- A. 5 & 6
- B. 5 & 5
- C. 5 & 4

**Question 8/15**

Mark all angles inside the figure. Then, write down the sides and angles.




----- sides

----- angles

- A. 3 & 3
- B. 3 & 5
- C. 3 & 4

**Question 9/15**

Mark all the right angles.




There are ----- right angles.

- A. 4
- B. 6
- C. 3

**Question 10/15**

Fill in the blanks with " smaller than" , "bigger than" or equal to;



This angle is ----- a right angle.

- A. smaller than
- B. bigger than
- C. equal to

**Question 11/15**

Fill in the blanks with " smaller than" , "bigger than" or equal to;




This angle is ----- a right angle.

- A. smaller than
- B. equal to
- C. bigger than

**Question 12/15**

Fill in the blanks with " smaller than" , "bigger than" or equal to;

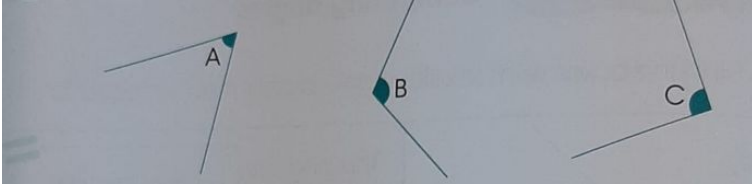


This angle is ----- a right angle.

- A. smaller than
- B. bigger than
- C. equal to

**Question 13/15**

Compare these angles and fill in the blanks.

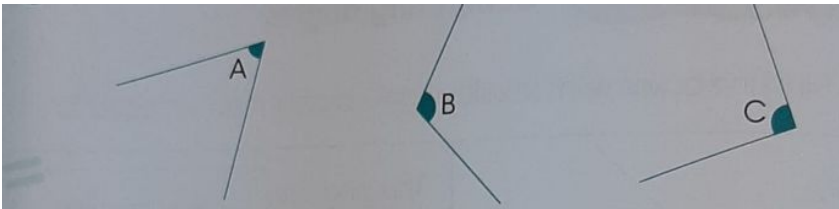


Angle ----- is a right angle.

- A. angle C
- B. angle B
- C. angle A

**Question 14/15**

Compare these angles and fill in the blanks.

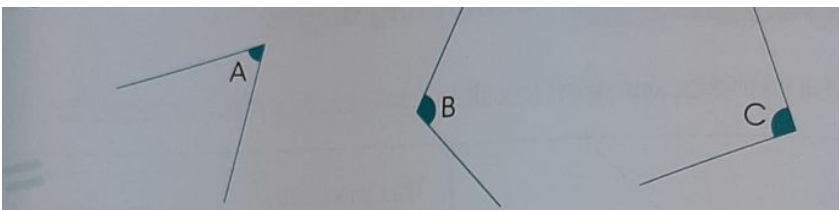


Angle B is ----- than a right angle.

- A. smaller
- B. bigger

**Question 15/15**

Compare these angles and fill in the blanks.



Angle ----- is the biggest angle.

- A. angle B
- B. angle C
- C. angle A