



Knowledge is power

Bangladesh International School, English section, Riyadh KSA

<i>Name:</i>		<i>Semester:</i>			
<i>Grade:</i>	<i>One</i>	<i>Section:</i>	<i>All</i>	<i>Class test:</i>	<i>5</i>
<i>Date:</i>	<i>/ /2020</i>	<i>Subject:</i>	<i>Maths</i>	<i>Topic:</i>	<i>money</i>
<i>Subject Teacher : Laila Rokshana</i>			<i>Approved by HoD: Moshir Rahman</i>		

Class test

Chapter-16 (Money)

Total Marks: / 22

1. Fill in the blanks. (m-3)

a) Cent means

b) means dollar.

c) \$ 1 = cents.

2. Circle the amount of money has a greater value. (m-1)

a)



b)



3. Match the following. (m-4)



twenty dollars



fifty cents



One hundred dollars





ten cents

4. Ring the note has a smaller value. (m-1)





5. Write the cost of each item in the boxes. (m-2)

a)

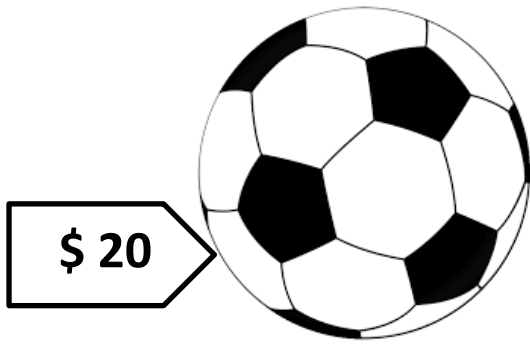
 <p>Cute</p> <p>\$ <input type="text"/></p>	
--	---

b)

 <p>\$ <input type="text"/></p>	
--	--

6. Add to find the total cost of the items. (m-2)

a)





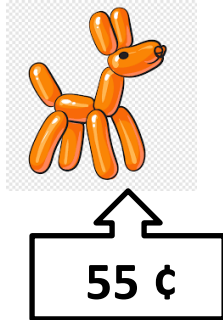

$$\text{\$ } 20 + \text{\$ } 50 = \text{\$ } \boxed{}$$

b)




$$\text{\$ } 50 + \text{\$ } 50 = \text{\$ } \boxed{}$$

7. Write down the amount of change you get. (m-3)


Item	I gave	My change
		
		

8. Ring the correct amount of money. (m-2)



25 ¢

→



9. Word problems. (m-4)

a) A doll costs \$ 33. A ball costs \$ 12. How much do the doll and ball cost altogether?

$$\text{\$ } \boxed{} + \text{\$ } \boxed{} = \text{\$ } \boxed{}$$

A doll and a ball costs \$ altogether.

b) An eraser costs 34 ¢. Fouad gives the cashier 50 ¢. How much change will he get?

$$\boxed{} \text{ ¢} - \boxed{} \text{ ¢} = \boxed{} \text{ ¢}$$

He will get ¢ .

Keep your house clean.

