

Answer Key

Bangladesh International School
English Section, Riyadh, KSA.

Handwritten signature and date

Name		Semester	2nd
Grade	3	Day	
Date		Subject	Maths
		Topic	Chapter- 12

Teacher - Mrs. Helima (Total marks - 20)

1. Write the time shown on each clock.


(5)

(a)




4:30

(b)




9:45

(c)



6:00

(d)



7:30