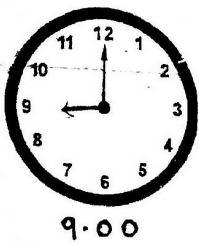


*Answer Key*

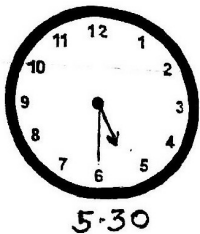
2. Draw the missing hour hand on each clock face.

(1.5)


(a)



(b)




(c)



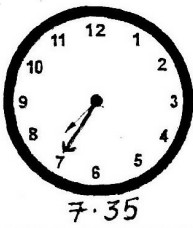
3. Draw the missing minute hand on each clock face.

(3)

(a)




(b)




(c)



(d)



(e)



(f)




*Answer Key*


4. Fill in the boxes.

(4)


(a)



(b)



(c)



(d)

