
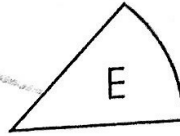
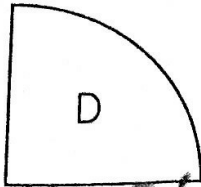
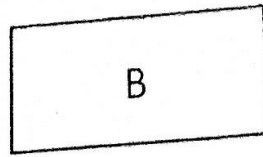
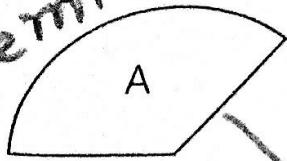
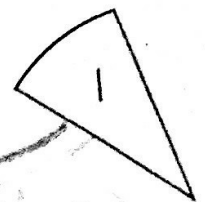
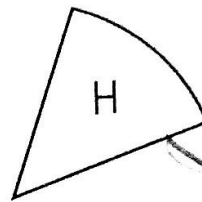


3 Look at the figures given and fill in the boxes below.

semi circle



quarter circle



semi circle

quarter circle

(a) Figure  is a quarter circle.

(b) Figure  is a semicircle.

(c) Figures  and  form a semicircle.

(d) Figures  and  form another semicircle.

(e) Figures  and  form a quarter circle.